


































# Observe the Moon each day for one month

Write down the date you make each observation, and illustrate how the Moon looks each day by shading in the circles to reflect the shape of the Moon. If you cannot see the Moon at all on a day, explain why i.e cloudy, foggy.

	Date: 	Date: 	Date: 	Date: 	Date: 	Date: 
Date: 	Date: 	Date: 	Date: 	Date: 	Date: 	Date: 
Date: 	Date: 	Date: 	Date: 	Date: 	Date: 	Date: 
Date: 	Date: 	Date: 	Date: 	Date: 	Date: 	Date: 
Date: 	Date: 	Date: 	Date: 	 <p>Does the Moon look the same each day? Does the Moon appear the same time each day, throughout the month?</p>		